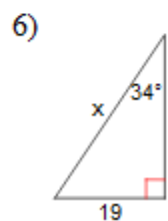
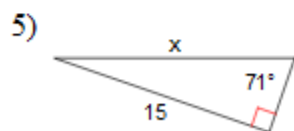
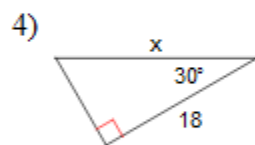
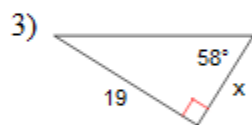
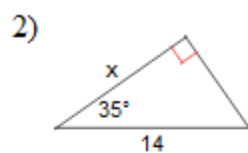
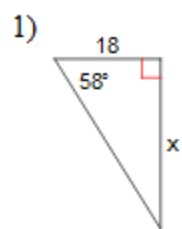


Name: _____

Right Triangles

Find the missing side. Round to the nearest tenth.



Find the measure of the indicated angle to the nearest degree.

